



# 17 The Use of Coins

Blacken the circle next to the correct answer.

1. Which of the following can 1  be exchanged for?

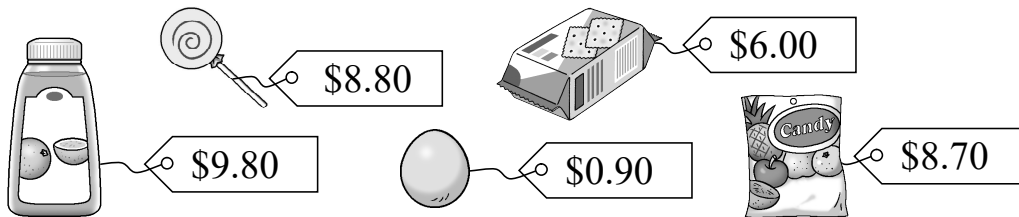
- A. 
 B. 
 C. 


2. Which of the following can 1  be exchanged for?


(There can be more than one answer.)


- A. 
 B. 
 C. 

Look at the pictures and answer the questions.



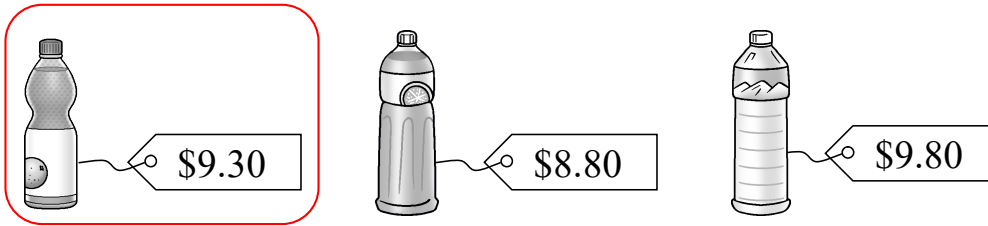
3. The price of a  is 6 dollars.

4. The price of a  is 8 dollars and 70 cents.

5. The price of an  is 90 cents.

Follow the instruction and circle the answer.

6.



Kevin buys a bottle drink and pays the following coins:



Circle his bottle drink in the picture above.

Circle the coins needed to pay the amount.

7.

	<p style="text-align: right; color: red;">Accept any reasonable answers.</p>
--	--

8.

	<p style="text-align: right; color: red;">Accept any reasonable answers.</p>
--	--

9.

	<p>Pay with the fewest coins:</p> <p style="text-align: right; color: red;">Accept any reasonable answers.</p>
--	--